


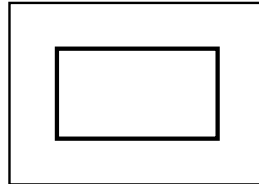
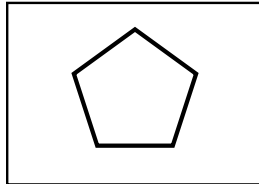
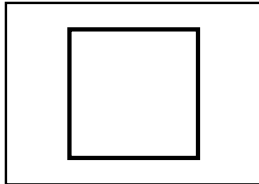
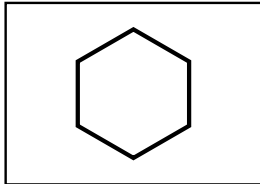
# Learnzy Academy

## Class 1 Shapes & Measurement Worksheet

Name: \_\_\_\_\_ Date: \_\_\_\_\_ Score: \_\_\_\_\_

### A. Name the shape and count its sides.

Write the name and the number of sides for each shape.



Name: _____
Sides: _____

Name: _____
Sides: _____

Name: _____
Sides: _____

Name: _____
Sides: _____

Name: _____
Sides: _____

### B. Measure with blocks.

Count the blocks and write the length in the box.

Ruler: 

--	--	--	--	--	--	--	--	--	--	--

 =

Eraser: 

--	--

 =

Spoon: 

--	--	--	--	--	--	--	--	--

 =

# Word Problems

## A. Word problems.

Read each problem and write the answer in the box on the right.

**1** Mia drew 6 circles and 5 squares. How many shapes did Mia draw?  
**Answer:** \_\_\_\_\_

**2** Priya has 6 chocolates. Mia gives 5 more. How many does Priya have?  
**Answer:** \_\_\_\_\_

**3** A shopkeeper had 14 pens. He sold 7. How many pens are left?  
**Answer:** \_\_\_\_\_

**4** Aarav has 8 stickers. Kabir has 8 stickers. How many in total?  
**Answer:** \_\_\_\_\_

**5** Raj had 8 sweets and ate 5. How many sweets are left?  
**Answer:** \_\_\_\_\_